

**Cambridge IGCSE™**CANDIDATE
NAMECENTRE
NUMBER

--	--	--	--	--

CANDIDATE
NUMBER

--	--	--	--

MATHEMATICS**0580/41**

Paper 4 Calculator (Extended)

May/June 2025**2 hours**

You must answer on the question paper.

You will need: Geometrical instruments

INSTRUCTIONS

- Answer **all** questions.
- Use a black or dark blue pen. You may use an HB pencil for any diagrams or graphs.
- Write your name, centre number and candidate number in the boxes at the top of the page.
- Write your answer to each question in the space provided.
- Do **not** use an erasable pen or correction fluid.
- Do **not** write on any bar codes.
- You should use a scientific calculator where appropriate.
- You may use tracing paper.
- You must show all necessary working clearly.
- Give non-exact numerical answers correct to 3 significant figures, or 1 decimal place for angles in degrees, unless a different level of accuracy is specified in the question.
- For π , use either your calculator value or 3.142.

INFORMATION

- The total mark for this paper is 100.
- The number of marks for each question or part question is shown in brackets [].

This document has **16** pages.

List of formulas

Area, A , of triangle, base b , height h .

$$A = \frac{1}{2}bh$$

Area, A , of circle of radius r .

$$A = \pi r^2$$

Circumference, C , of circle of radius r .

$$C = 2\pi r$$

Curved surface area, A , of cylinder of radius r , height h .

$$A = 2\pi rh$$

Curved surface area, A , of cone of radius r , sloping edge l .

$$A = \pi rl$$

Surface area, A , of sphere of radius r .

$$A = 4\pi r^2$$

Volume, V , of prism, cross-sectional area A , length l .

$$V = Al$$

Volume, V , of pyramid, base area A , height h .

$$V = \frac{1}{3}Ah$$

Volume, V , of cylinder of radius r , height h .

$$V = \pi r^2 h$$

Volume, V , of cone of radius r , height h .

$$V = \frac{1}{3}\pi r^2 h$$

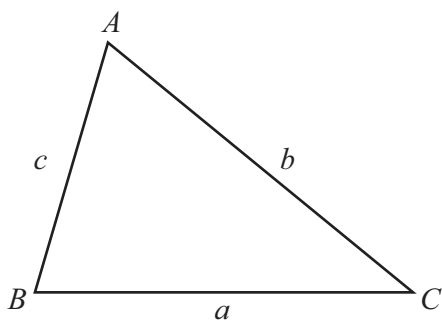
Volume, V , of sphere of radius r .

$$V = \frac{4}{3}\pi r^3$$

For the equation $ax^2 + bx + c = 0$, where $a \neq 0$,

$$x = \frac{-b \pm \sqrt{b^2 - 4ac}}{2a}$$

For the triangle shown,



$$\frac{a}{\sin A} = \frac{b}{\sin B} = \frac{c}{\sin C}$$

$$a^2 = b^2 + c^2 - 2bc \cos A$$

$$\text{Area} = \frac{1}{2}ab \sin C$$

1 Solve.

$$4c - 9 = 13$$

$$c = \dots\dots\dots [2]$$

2 Work out.

$$\frac{16.71 + 46.13}{\sqrt{8.6^2 - 3.5^2}}$$

Give your answer correct to 2 significant figures.

$$\dots\dots\dots [2]$$

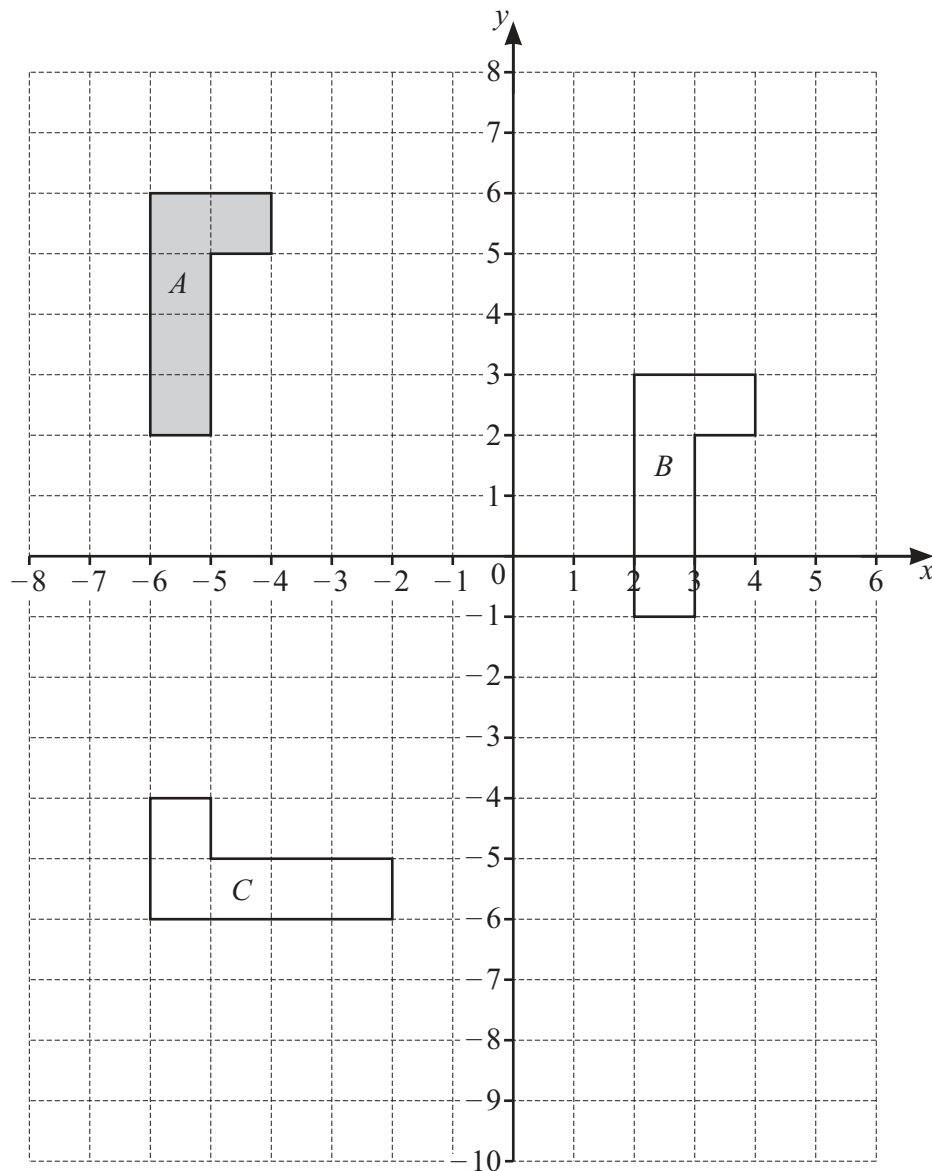
3 In the USA, one gallon of fuel costs \$4.83 .
In the UK, one litre of fuel costs £1.62 .

The exchange rate is £1 = \$1.215 .
1 gallon = 3.785 litres

In which country does 1 litre of fuel cost more and by how much?
Give your answer in dollars.

$$\dots\dots\dots \text{ by } \$ \dots\dots\dots [3]$$





(a) Describe fully the **single** transformation that maps

(i) shape A onto shape B

.....
 [2]

(ii) shape A onto shape C .

.....
 [3]

(b) On the grid, draw the image of shape A after a reflection in the line $x = -2$. [2]





5

- 5 (a) These are the first 5 terms of a sequence.

1 8 27 64 125

Find the 10th term of this sequence.

..... [1]

- (b) These are the first 5 terms of a different sequence.

5 8 13 20 29

Find the n th term of this sequence.

..... [2]

- (c) The **sum of the first n terms** of another sequence is $\frac{n}{2}(5n-1)$.

- (i) Use $n = 2$ to find the sum of the first two terms in this sequence.

..... [1]

- (ii) Find the 3rd term of this sequence.

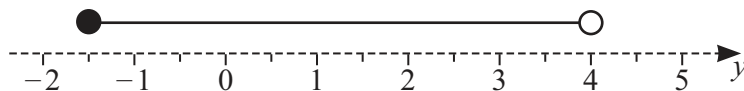
..... [2]

- 6 Expand.

$$5x^2(3x-2)$$

..... [2]





Write down the inequality in y shown by the number line.

..... [2]

- 8 Hadi buys a dishwasher.
He can either pay a single payment of \$980 or he can pay using a monthly plan.
The monthly plan is 20% of \$980 **plus** 12 payments of \$75.25 .

(a) Hadi uses the monthly plan.

Calculate the total amount Hadi pays.

\$ [2]

(b) Find the percentage increase in the cost using the monthly plan compared to a single payment.

..... % [2]

- 9 In a sale, the original price of a sewing machine is reduced by \$38.
This is an 8% reduction in the original price.

Work out the original price of the sewing machine.

\$ [2]



10 (a) Write down **all** the factors of 18.

..... [2]

(b) Factorise.

$$3y - xy + 15 - 5x$$

..... [2]

(c) $3y - xy + 15 - 5x = 18$

where x and y are positive integers.

Using your answers to **part (a)** and **part (b)**, find one possible value of x and the corresponding value of y .

$x = \dots\dots\dots$, $y = \dots\dots\dots$ [2]

11 A warehouse has a floor area of 800 m^2 .
The plan of the warehouse is drawn to a scale of 1 : 50.

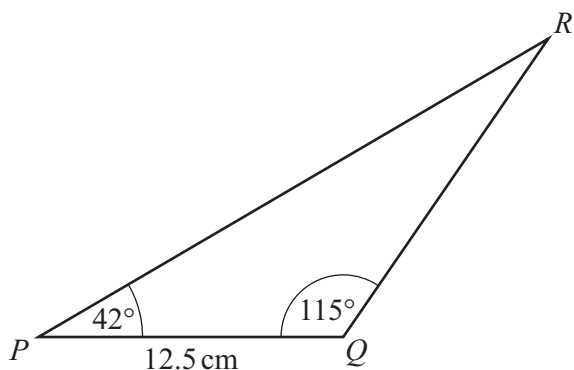
Calculate the floor area on the plan.
Give your answer in square centimetres.

..... cm^2 [3]





12



NOT TO
SCALE

The diagram shows triangle PQR .

Calculate the shortest distance from Q to PR .

..... cm [3]

13 Make x the subject of this formula.

$$A = w^2 + 5x^2$$

$x =$ [3]



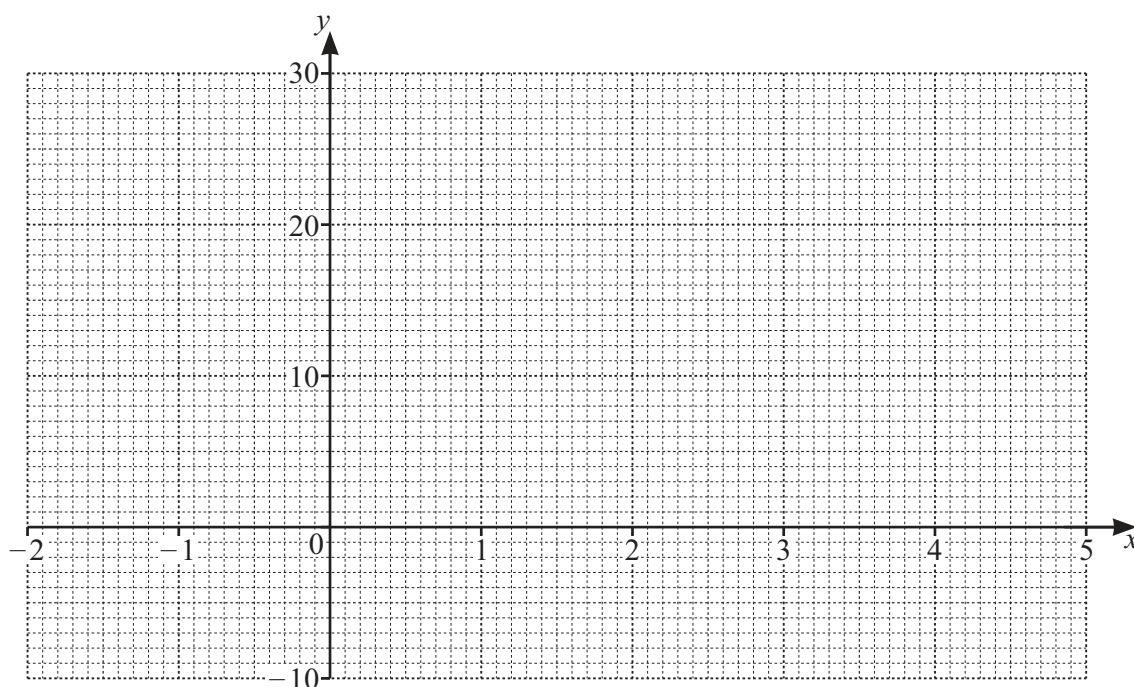
14 The table shows some values for $y = 5x^2 - x^3 - 4$.

x	-2	-1	0	1	2	3	4	5
y	24		-4		8	14		-4

(a) Complete the table.

[3]

(b) On the grid, draw the graph of $y = 5x^2 - x^3 - 4$ for $-2 \leq x \leq 5$.



[4]

(c) By drawing a suitable straight line on the grid, solve the equation $x^3 - 5x^2 - x + 14 = 0$.

$x = \dots\dots\dots$ or $x = \dots\dots\dots$ or $x = \dots\dots\dots$ [4]



- 15 The height of each of 140 basketball players is recorded.
The table shows the results.

Height (h cm)	$160 < h \leq 180$	$180 < h \leq 185$	$185 < h \leq 190$	$190 < h \leq 200$	$200 < h \leq 210$
Frequency	7	12	31	70	20

- (a) Calculate an estimate of the mean height.

..... cm [4]

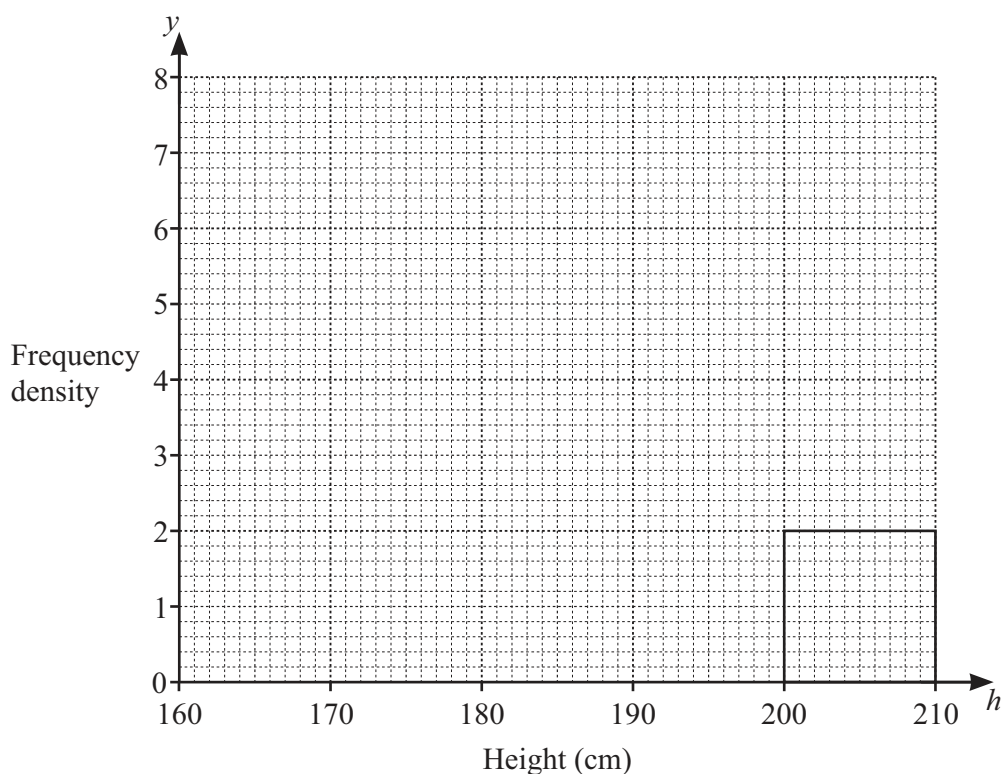
- (b) Two of the players are chosen at random.

Find the probability that both players have a height greater than 190 cm and no more than 200 cm.

..... [2]



(c) Complete the histogram to show the information in the frequency table.

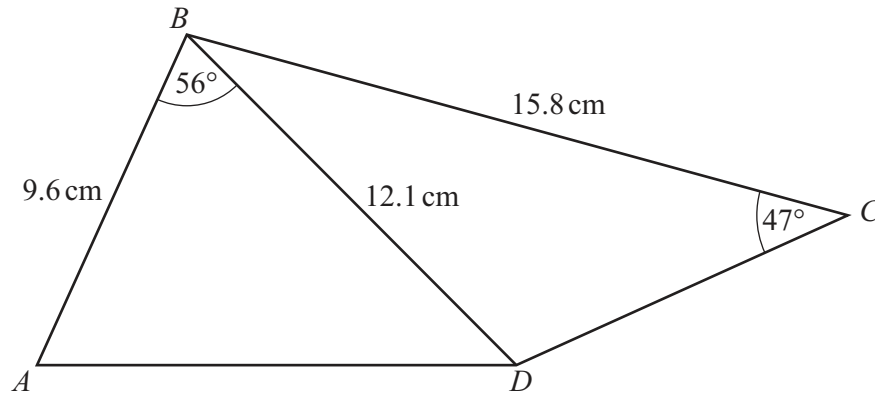


[3]

- 16 Mateo invests \$1250 at a rate of $r\%$ per year compound interest. At the end of 6 years the total value of his investment is \$1484.

Calculate the value of r .

$r = \dots\dots\dots$ [3]



NOT TO
SCALE

The diagram shows a quadrilateral $ABCD$.

(a) Calculate AD .

$AD = \dots\dots\dots \text{ cm}$ [3]

(b) Calculate the obtuse angle BDC .

Angle $BDC = \dots\dots\dots$ [4]

(c) Calculate the area of the quadrilateral.

$\dots\dots\dots \text{ cm}^2$ [3]

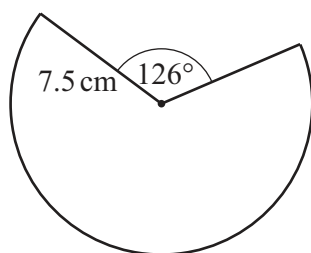


- 18 $2x^2 + 12x - 2$ can be written in the form $a(x+b)^2 - c$.

Find the values of a , b and c .

$a = \dots\dots\dots$, $b = \dots\dots\dots$, $c = \dots\dots\dots$ [3]

19



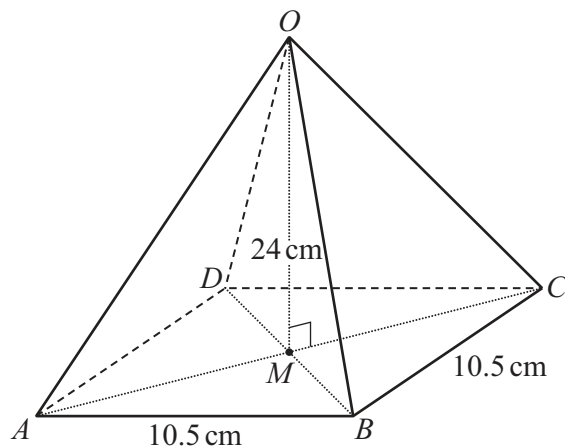
NOT TO
SCALE

The diagram shows a major sector of a circle with radius 7.5 cm.

Calculate the perimeter of the major sector.

$\dots\dots\dots$ cm [4]





NOT TO
SCALE

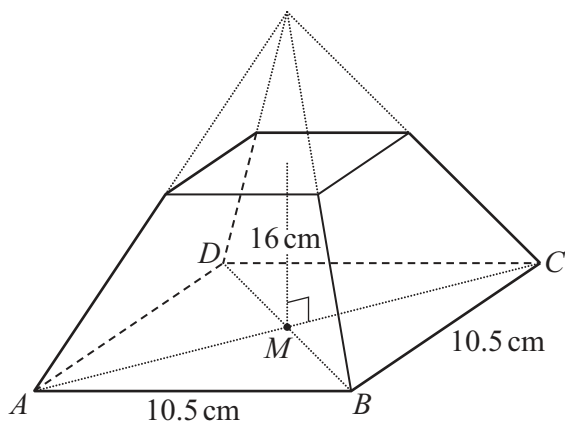
The diagram shows a pyramid $OABCD$.
The pyramid has a square base, $ABCD$, with sides 10.5 cm.
The vertex O is vertically above the centre of the base, M .
The height of the pyramid is 24 cm.

- (a) Calculate the angle that OA makes with the base.

..... [4]



(b)



NOT TO
SCALE

The diagram shows a frustum of the pyramid $OABCD$.
The height of the frustum is 16 cm.

Calculate the volume of the frustum.

..... cm^3 [5]

Question 21 is on page 16.



21

$$\frac{16^{5m}}{4} = 64^{2n}$$

Find m in terms of n .

$$m = \dots\dots\dots [3]$$

22

$$I = \frac{V}{R}$$

V is 50, correct to the nearest 10.

R is 13, correct to the nearest integer.

Calculate the upper bound of I .

$$\dots\dots\dots [3]$$

Permission to reproduce items where third-party owned material protected by copyright is included has been sought and cleared where possible. Every reasonable effort has been made by the publisher (UCLES) to trace copyright holders, but if any items requiring clearance have unwittingly been included, the publisher will be pleased to make amends at the earliest possible opportunity.

To avoid the issue of disclosure of answer-related information to candidates, all copyright acknowledgements are reproduced online in the Cambridge Assessment International Education Copyright Acknowledgements Booklet. This is produced for each series of examinations and is freely available to download at www.cambridgeinternational.org after the live examination series.

Cambridge Assessment International Education is part of Cambridge Assessment. Cambridge Assessment is the brand name of the University of Cambridge Local Examinations Syndicate (UCLES), which is a department of the University of Cambridge.

